

Standard : 1st (E.M.)

Subject : English

Date : 09-05-2020

Worksheet- 6



M.S. SCHOOL

KG TO 12 (English / Gujarati Medium)

5 - Krishna Nagar, Jamnagar - 6. 0288-2566 916 | 9377 566 916

Q- 1. Read the sentences and answer the questions.

Anita : I am Anita.

Ravi : (smiling) I am Ravi.

Anita : What is this?

Ravi : It is a ball.

Anita : Let s play.



Dev : What are these?

Rima : These are kites.

I love kites.

Dev : (happy) Let s fly them.



1. Who has a ball? _____

2. Who has a kites? _____

3. Who love kites? _____

Q- 2. Fill in the blanks using help of the words given in the bracket.

1. It is a _____. (ball/apple)

2. We fly _____. (dolls/kites)

3. I ____ kites. (hate/love)

Q- 3. Match the correct sentences.

I can t	play football
My friend can	bark loudly
My cat can t	drive a car
My dog can	run fast

Q- 4. Answer the questions. Use the words given in the box for help.

[plays cricket, dances, teaches, drives a bus]

1. What does a dancer do? A dancer _____.

2. What does a driver do? A driver _____.

3. What does a teacher do? A teacher _____.

4. What does a cricketer do? A cricketer _____.

Standard : 1st (E.M.)

Subject : English

Date : 09-05-2020

Worksheet- 6



M.S. SCHOOL

KG TO 12 (English / Gujarati Medium)

5 - Krishna Nagar, Jamnagar - 6. 0288-2566 916 | 9377 566 916

Q- 5. Use has or have to complete the sentences that follows.

1. I ____ a present for you.

2. She ____ a bird on her hat.

3. The kittens ____ a warm bed.

4. A tiger ____ a long tail.

5. I ____ a best friend.

6. All elephants ____ long trunks.

Q- 6. Read the table and use has/have match it and answer the questions that follow.

My friend		a new	pets
Priya	Has	many	balls
Ranjit's brother		two	car
I		many	trunks
All elephants	have	a red	book
My friends		long	dolls

Q1. What does your friend have? _____

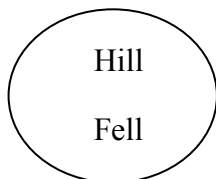
Q2. What does Ranjit's brother have? _____

Q3. What do you have? _____

Q4. What do all elephants have? _____

Q5. What do your friends have? _____

Q- 7. Underline the words in each line that rhymes with the words in the circle.



pill

hit

pen

fall

tall

tell

crow

brown

house

Q- 8. Look at the picture and write each person is use words from the box.

[driver , cricketer , teacher , dancer]



Q- 9. Write days of the week. Which day you like most ? Why ?

Standard : 1st (E.M.)

Subject : Hindi

Date : 09-05-2020

Worksheet- 6



M.S. SCHOOL

KG TO 12 (English / Gujarati Medium)

5 - Krishna Nagar, Jamnagar - 6. 0288-2566 916 | 9377 566 916

Q - 1. कि से ज्ञि तक लिखो ।

Q - 2. 'आ' की मात्रा वाले शब्द लिखो ।

1. _____

2. _____

3. _____

4. _____

5. _____

6. _____

Q - 3. अक्षरों को मिलाकर लिखो ।

ट + ि + क + ट = _____

स + ि + य + ा + र = _____

ग + र + ि + म + ा = _____

क + ि + र + ण = _____

स + ि + त + ा + र = _____

Q - 4. वाक्यों को पढो और लिखो ।

शनिवार का दिन था।

गरिमा चित्र बनाकर लाई।

राम किताब पढ रहा था।

फिर चिड़िया उड़कर आई।

Standard : 1st (E.M.)

Subject : Hindi

Date : 09-05-2020

Worksheet- 6



M.S. SCHOOL

KG TO 12 (English / Gujarati Medium)

5 - Krishna Nagar, Jamnagar - 6. 0288-2566 916 | 9377 566 916

Q - 5. शब्दों को उनकी सही मात्रा से मिलाओ।

आभा		गरिमा
टिकट		मटका
हलवा	(ा)	तिनका
छाता	(ि)	सितार
नारियल		पालक

Q - 6. वर्ग -पहेली में से 'इ' की मात्रा वाले शब्द छाँटकर लिखो।

दिन _____

कि	हि	दि	नि
ता	र	न	शा
ब	न	भा	पि
सि	ता	र	न

Standard : 1st (E.M.)

Subject : Maths

Date : 09-05-2020

Worksheet- 6



M.S. SCHOOL

KG TO 12 (English / Gujarati Medium)

5 - Krishna Nagar, Jamnagar - 6. 0288-2566 916 | 9377 566 916

Q - 1. Subtract the following.

(a) 9	(b) 8	(c) 7	(d) 3	(e) 6
- 4	- 2	- 3	- 2	- 5
-----	-----	-----	-	-----
-----	-----	-----	-----	-----
(f) 2	(g) 5	(h) 6	(i) 9	(j) 8
- 1	- 3	- 4	- 5	- 6
-----	-----	-----	-----	-----
-----	-----	-----	-----	-----

Q - 2. Tick the correct option.

1. Take away 2 from 6, we get _____

- a. 10 b. 4 c. 2

2. $10 - 3 =$ _____

- a. 6 b. 8 c. 7

3. $6 - 0 =$ _____

- a. 0 b. 6 c. 5

4. $8 - 8 =$ _____

- a. 8 b. 0 c. 1

5. $4 - \underline{\quad} =$ _____

- a. 4 b. 0 c. 3

6. Which of the following shows $5 - 2$?

- a. 3 b. 5 c. 2

7. $6 - 3$ means

- a. take away 3 from 6 b. take away 6 from 3 c. $6 + 3$

8. $5 - 2$ is same as

- a. $3 + 0$ b. $1 + 1$ c. $5 + 2$

Q - 3. Sort the following letters according to the lines they are made up of

{ A, C, E, K, O, I, T, H, L, S }

Straight lines	
Curved lines	

Standard : 1st (E.M.)

Subject : Maths

Date : 09-05-2020

Worksheet- 6

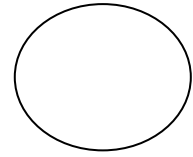
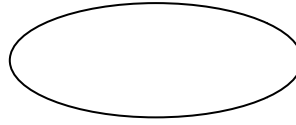


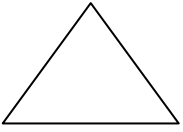


M.S. SCHOOL


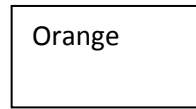
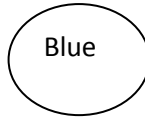
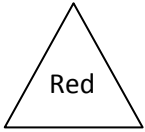
KG TO 12 (English / Gujarati Medium)

5 - Krishna Nagar, Jamnagar - 6. 0288-2566 916 | 9377 566 916

Q -4. Write the shapes name.



Q - 5. Draw and Colour the picture according to the given colour code.



Now count the number of each shape and fill in the blanks.

Triangles = _____



Rectangles = _____

Circles = _____

Squares = _____

Oval = _____

Q - 6. Match the objects with the correct shapes.



Standard : 1st (E.M.)

Subject : Science

Date : 09-05-2020

Worksheet- 6



M.S. SCHOOL

KG TO 12 (English / Gujarati Medium)

5 - Krishna Nagar, Jamnagar - 6. 0288-2566 916 | 9377 566 916

Q- 1. Answer the following questions.

1. Name any two things that can grow. _____
2. Name any two non-living things. _____
3. Name three foods we get from animal. _____
4. How many meals do we eat in a day? _____
5. Why do we need food? _____

Q- 2. Circle the odd ones.

- | | | |
|--------|---------|-------------|
| car | rabbit | book |
| lion | hen | balloon |
| human | bird | chair |
| wall | plant | human |
| cheese | egg | butter |
| wheat | rice | green gram |
| rice | peas | kidney gram |
| mango | banana | brinjal |
| potato | cabbage | apple |
| meat | milk | mango |

Q- 3. Write six pulses name. _____

Q- 4. Match the following.

- | | |
|-----------------|--------------------|
| (1)cheese | (a)animal |
| (2)potato | (b)milk |
| (3)eggs | (c)vegetable |
| (4)morning meal | (d)dinner |
| (5)afternoon | (e)human |
| (6)night | (f)lunch |
| (7)grapes | (g)breakfast |
| (8)breath | (h)food from plant |

Q- 5. List the six non-living things. _____

Q- 6. List the five living things.
