



**Q - 1. Match the following.**

**A**

1. the earth revolves
2. Gram Panchayat
3. Prithviraj
4. Constitutional head of the state
5. The first Muslim ruler of India

**B**

- a) provides street lights in village
- b) Governor
- c) Qutub-ud-din-Aibak
- d) Sun
- e) Chuhan

**Q - 2. Short answer question.**

1. who defeated Harshavardhan in a battle ? \_\_\_\_\_  
\_\_\_\_\_
2. How much time does the earth take to complete the one revolution ? \_\_\_\_\_  
\_\_\_\_\_
3. why does the nation require the government . \_\_\_\_\_  
\_\_\_\_\_
- 4.. In how many and in which different parts are the states of " medieval Age " divided ? \_\_\_\_\_  
\_\_\_\_\_
5. what is a latitude ? . \_\_\_\_\_  
\_\_\_\_\_
6. who established " Gulam - Dynasty " in Delhi ? \_\_\_\_\_  
\_\_\_\_\_
7. How many states and union Territories are there in India ? \_\_\_\_\_  
\_\_\_\_\_
8. why is the plateau of south India called a peninsula ? \_\_\_\_\_  
\_\_\_\_\_
9. who was the first woman ( female ) ruler to occupy the throne of Delhi ? \_\_\_\_\_  
\_\_\_\_\_
10. who is appointed as Chief minister by Governor ? \_\_\_\_\_  
\_\_\_\_\_

**Q -3. Long answer question. ( write any four)**

1. what is a " revolution " ? Explain with drawing
2. what was the difference between Pulkeshi II and Harsh's personalities ?
3. Explain the structure of the state Government.
4. Describe the Characteristics of the medieval Rajput men and women.
5. why are desert thinly populated ?
6. Describe the reforms of Allauddin-Khilji.
7. " Raziya " - a powerful female ruler . write your views on this topic.
8. what are the function of the chief minister ?






**Q-1. Fill in the blanks with the help of options.**

1. It is the greatest monumental structures in Tibet . It is situated 130m above the Lhasa River vally .  
\_\_\_\_\_ ( The potala palace , matsumato castle )
2. It is a castle on a small island on the Normandy coast (France ) \_\_\_\_\_  
( mount saint-michel , The potala palace )
3. It helps in decreasing non-biodegradable pollutants \_\_\_\_\_  
( Avoiding the use of plastic , Planting trees )
4. This helps in Making the earth green \_\_\_\_\_  
( Giving old things to the needy , Planting trees )
5. This kings rupiya be came the forerunner of the modern rupee \_\_\_\_\_  
( Sher shah suri , king George V )
6. This king's portrait was in India's paper currency in 1923 \_\_\_\_\_  
( king George V , Sher shah suri )
7. DeNominations of 1 paise , 2 Paise , 3 paise , 5 paise , 10 Paise , 20 Paise and 25 paise were in circulation . till this  
date \_\_\_\_\_ ( 30th June 2011 , 14th July 2012 )
8. Indian currency notes are not made of paper but made of this material \_\_\_\_\_  
( cotton and cotton rag , 1 rupee note )
9. This Lazy fish is found in Australia. It looks like a seaweed \_\_\_\_\_ ( Leafy sea dragon , Olm )
10. It is looks like a decaying leaf. It is found in Madagascar \_\_\_\_\_  
( Satanic Leaf-tailed Gecko , olm )
11. It has poisonous fang \_\_\_\_\_ ( Assassin spider , hairy crab )
12. It is colour blind and has hairy legs that look like wings \_\_\_\_\_  
( Blanket octopus , Hairy crab )
13. Avoid using mobile phones while driving because it is dangerous and many cause serious accident.  
\_\_\_\_\_ ( prevent Accident , prevent Injuries )
14. Avoid using mobile phones while reading books , cooking new dishes or enjoying your favourite activities  
\_\_\_\_\_ ( Recreation , Happy time )
15. Too much texting on mobile phones causes pain and inflammation in the thumb and wrist area  
\_\_\_\_\_ ( prevent injuries , prevent Accident )
16. He was spanish painter One of his most famous works is his depiction of the german bombing at guernica , spain  
\_\_\_\_\_ ( pablo picasso , MF Hussain )
17. It is the oldest and largest museum in Japan. \_\_\_\_\_  
( Tokyo National Museum , Louvre Museum )
18. It is the largest and the most prestigious Museum of art and history in the Nether lands  
\_\_\_\_\_ ( Rijksmuseum , Prado Museum )
19. It is the largest and oldest museum of India \_\_\_\_\_ ( Indian Museum , Egyptian Museum )
20. It is one of the world's best museum. Its highlights include the objects from the Tomb of Tutankhamun and Royal  
mummy Room \_\_\_\_\_ ( Egyptian museum , Indian museum )
21. It has the best collection of European art. It is the largest museum in spain \_\_\_\_\_  
( Prado museum , Louvre museum )



22. It is the Asia's largest music festival ( Goa ) \_\_\_\_\_ ( Sunburn festival , NH7 weekender )
23. It is Asia's largest collage festival held annually at IIT Bombay. \_\_\_\_\_ ( Mood Indigo , Escape )
24. World's rarest reptile \_\_\_\_\_ . ( Galapagos Giant Tortoise , Green Anaconda )
25. world's heaviest reptile ( about 2000 kg) \_\_\_\_\_ ( Salt water crocodile , Komodo dragon )
26. World's largest snake ( about 227 kg) \_\_\_\_\_ ( Green Anaconda , Marine Laguna )
27. world's largest turtle cup to 2m long and about 900 kg ) \_\_\_\_\_ .  
( Leatherback sea turtle , Galapagos Giant Tortoise )
28. An environmental activist , Popularly called ' Forest man of India ' \_\_\_\_\_ .  
( Kailash satyarthi , Jadav Payeng )
29. He was the Nobel peace prize in 2014 for his work against child labour \_\_\_\_\_ .  
( Kailash satyarthi , Jadav Payeng )
30. Country : Iraq , founded :1894 & BCE, Abandoned: 7th century CE. The city was destroyed due to war  
\_\_\_\_\_ ( Babylon , Troy )
31. Bandhavgrah National park is famous for \_\_\_\_\_ ( White Tigers , Glass frog )
32. \_\_\_\_\_ helps the body to release the feel good hormones ( laughter , blood vessels )





## પ્રશ્ન-1. નીચેના શબ્દસમૂહ માટે એક શબ્દ લખો.

- થોડા સુકા, થોડા ભીના - \_\_\_\_\_
- ગાય ભેસનું ટોળું - \_\_\_\_\_
- પગથી ચાલી શકાય તેવો સાંકડો રસ્તો - \_\_\_\_\_
- સહન ન થઈ શકે તેવું - \_\_\_\_\_
- જેનું મુલ્ય ન થઈ શકે તેવું - \_\_\_\_\_

## પ્રશ્ન-2. નીચેના સમાનાર્થી શબ્દ લખો.

- પાન - \_\_\_\_\_
- સંદેશો - \_\_\_\_\_
- ડુંગર - \_\_\_\_\_
- આકાશ - \_\_\_\_\_
- સોલાગણ - \_\_\_\_\_

## પ્રશ્ન-3. નીચેના શબ્દોના વિરુદ્ધાર્થી શબ્દો લખો.

- ગરીબ x \_\_\_\_\_
- અગવડ x \_\_\_\_\_
- પસંદ x \_\_\_\_\_
- સશક્ત x \_\_\_\_\_
- હાસ્ય x \_\_\_\_\_

## પ્રશ્ન-4. યોગ્ય શબ્દ પસંદ કરી ખાલી જગ્યા પૂરો.

- આપની પાસે કઈ એવી મૂડી નથી \_\_\_\_\_ આપણે વેપાર કરી પૈસાદાર થઈ શકીએ. ( કે , અને )
- મહાદેવ ગાયને હાંકવા રોકાયો \_\_\_\_\_ એને પરીક્ષામાં મોડું થયું. ( એટલે , કે , તો )
- વર્ગમાં પ્રથમ પાંચમાં મારો \_\_\_\_\_ નહોતો. ( સમાવેશ , શમાવેશ )
- સવારે વહેવા ઉઠતા મને \_\_\_\_\_ આવે છે. ( આરસ , આળસ )
- પરીક્ષામાં હું \_\_\_\_\_ થયો. ( સફર , સફળ )

## પ્રશ્ન-5. નીચેના શબ્દોનો ઉપયોગ કરી વાક્યપ્રયોગ કરો.

- ચરણ = \_\_\_\_\_
- મંગળ = \_\_\_\_\_
- સલુન = \_\_\_\_\_
- ભીડ = \_\_\_\_\_
- ભિખારી = \_\_\_\_\_

## પ્રશ્ન-6. નીચેના વિધાનો ખરા છે કે ખોટા તે કહો.

- મહાદેવને પરીક્ષામાં બેસવાની ના પાડી. \_\_\_\_\_
- મણિયાએ ખેતરમાં ઘુસેલી ગાયને બહાર કાઢી. \_\_\_\_\_
- ખુશાલમાંના ખેતરમાં કોઈ હળ હાંકનાર ન હતું. \_\_\_\_\_
- મધુબહેન ગાંધીજીના ભત્રીજી થતા હતા. \_\_\_\_\_
- ભીખુ ખુબ જ ધનવાન હતો. \_\_\_\_\_

## પ્રશ્ન-7. નીચેના વાક્યો કોણ બોલે છે તે કહો.

- 'ખાવાનું' તો ભાઈ લાવે ત્યારે \_\_ ' - \_\_\_\_\_
- 'માં ! કાઈ ખાવાનું છે ?' - \_\_\_\_\_
- 'એક શેઠીયે મને જલેબી ખવડાવી.' \_\_\_\_\_
- 'એઈ - આંખ પાણુ નથી કે શું ?' \_\_\_\_\_
- ઘઉંના મોલમાંથી ગાય હાંકવા ગયો હતો સાહેબ \_\_\_\_\_

## પ્રશ્ન-8. નીચેની કાવ્યપંક્તિ પૂર્ણ કરો.

- સખી, આજની ઘડી \_\_\_\_\_  
\_\_\_\_\_ મંડપ રચાવીએ જ રે . સખી \_\_\_\_\_

## પ્રશ્ન-9. નીચેની પંક્તિનો વિચાર વિસ્તાર કરો.

- વિપત પડેના વલખીએ વલખે વિપત ન જાય :  
વિપતે ઉઘમ કીજીયે , ઉઘમ વિપતને ખાય.

## પ્રશ્ન-10. નીચેના કોઈપણ એક વિષય પર નિબંધ લખો.

- 15 મી ઓગસ્ટ અથવા 1. દિવાળી



## खण्ड - ख

प्रश्न-1. दिए गए प्रश्नों के उत्तर पर ✓ निशान लगाइए :

- |   |                       |                |
|---|-----------------------|----------------|
| क) पानी जमा करने के लिए बैक की ईमारत के ऊपर क्या लगी है               | a) टंकिया             | b) बोतले       |
| ख) विराट कोहली ने क्रिकेट में शुरुआत कब की ?                          | a) सन 2004 में        | b) सन 2002 में |
| ग) किसान रात में दिशा की पहचान कैसे कर लेता है ?                      | a) सूरज से            | b) तारों से    |
| घ) " मुसकराकर चल मुसाफिर " कविता के लेखक कौन है                       | a) गोपालदास नरिज      | b) सुदर्शन     |
| च) शहर का बड़ा भारी बुद्धिमान भी किसान के यहाँ जाकर क्या सिद्ध होगा ? | a) अमीर b) निर्बुद्धि | c) स्वस्थ      |

प्रश्न-2. किसने किसको कहा :

- |   |                        |                          |
|---|------------------------|--------------------------|
| 1. यह नौ सौ आदमी कवि न थे , केवल नाम के भूखे थे | a) मंत्री ने सिपाही से | b) राजा ने मंत्री से कहा |
| 2. मैं इतनी देर तक तुम्हारा इंतजार नहीं कर सकता | a) साधू ने देवदत्त से  | b) साधू ने हरिराम से     |

प्रश्न-3. कविता की पंक्तियाँ पूरी कीजिए.

1. नए हाथ से \_\_\_\_\_  
 \_\_\_\_\_ उभारो |  
 नए राग \_\_\_\_\_  
 \_\_\_\_\_ अक्षर दो |  
 युग को \_\_\_\_\_  
 \_\_\_\_\_ सृजन है |

प्रश्न-4. अति लघु प्रश्नोत्तर .

- कसरत का क्या अर्थ है ? \_\_\_\_\_
- अब्राहम लिंकन का जन्म कहा हुआ था ? \_\_\_\_\_
- लिंकन ने किस तरह के कामों से दूर रहने की सिख दी ? \_\_\_\_\_
- विराट कोहली को वर्ष 2013 में किस पुरस्कार से सम्मानित किया गया | \_\_\_\_\_

प्रश्न-5. रेखांकित शब्दों में संज्ञा का कौन सा भेद है ? ✓ का निशान लगाइए

- |   |                       |                    |                   |
|---|-----------------------|--------------------|-------------------|
| 1. चिंता की <u>गहराई</u> में उसकी आँख लग गई     | a) व्यक्तिवाचक संज्ञा | b) जातिवाचक संज्ञा | c) भाववाचक संज्ञा |
| 2. <u>रामदयाल</u> ने मौका देखते ही चौका मारा    | a) व्यक्तिवाचक संज्ञा | b) जातिवाचक संज्ञा | c) भाववाचक संज्ञा |
| 3. आपका <u>रिश्तेदार</u> पानी के लिए जूझ रहा है | a) व्यक्तिवाचक संज्ञा | b) जातिवाचक संज्ञा | c) भाववाचक संज्ञा |
| 4. महेश काल बहुत <u>उदास</u> था                 | a) व्यक्तिवाचक संज्ञा | b) जातिवाचक संज्ञा | c) भाववाचक संज्ञा |

प्रश्न-6. लघु उत्तरीय प्रश्न ( किन्हीं तीन प्रश्नों के उत्तर )

- |   |  |
|---|--|
| क) जल बैक में खाता कैसे खुलेगा ?                          | ख) कोहली कब और कैसे सुर्खियों में आए ? |
| ग) सिद्धार्थ के उठाते ही पक्षी को नया जन्म कैसे मिल गया ? | घ) साधू को स्त्री पर क्रोध क्यों आया   |
| च) दास प्रथा का क्या अर्थ है                              |  |

## खण्ड - ग

प्रश्न-1. दीर्घ उत्तरीय प्रश्नोत्तर

- " इतने उचे उठो " कविता का मूलभाव अपने शब्दों में लिखिए |
- मनुष्य को स्वस्थ रहने के लिए किन किन चीजों की आवश्यकता होती है |
- भारतीय किसानों को किन किन चीजों की जानकारी होती है |
- पाठ के आधार पर " विराट कोहली " का जीवन परिचय लिखिए |

प्रश्न-2. " स्वतंत्रता दिवस " या " दीवाली " में से किसी एक विषय पर निबंध लिखिए

प्रश्न-3. " औपचारिक " या " अनौपचारिक " पत्र में से कोई भी एक पत्र आप लिखिए . ( विषय - अपनी इच्छानुसार )



**Q - 1. find the value in each of the following .**

a)  $\frac{1}{3}$  of 18

b)  $\frac{7}{11} \div \frac{35}{22}$

**Q - 2. find the product.**

a)  $0.12 \times 0.47$

b)  $8714 \div 1000$

**Q - 3. The weight of 6 sweet boxes is 4.32 kg. find the weight of 1 sweet box.**

**Q - 4. Add the following rational numbers** a)  $\frac{9}{10} + (-\frac{3}{5})$

**Q - 5. solve the following**

a)  $(-4\frac{1}{5}) \times (-2\frac{1}{2})$

b)  $(-\frac{9}{7}) \div (-\frac{11}{14})$

**Q - 6. simplify the following.**

a)  $5^2 \times 5^7$  \_\_\_\_\_

c)  $101^8 \div 101^6$  \_\_\_\_\_

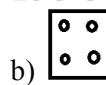
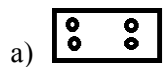
**Q - 7. find the value of the following numbers.**

a)  $3^5$  \_\_\_\_\_

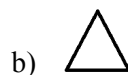
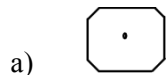
d)  $10^4$  \_\_\_\_\_

**Q - 8. expanded the following numbers** a) 368.406

**Q - 9. Draw the lines of symmetry in the following figures.**



**Q - 10. find the angle of rotation and the order of rotational symmetry for the following figures.**



**Q - 11. count the number of faces and vertices for the given shape**

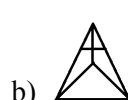


	Fig A	Fig B
Faces		
Vertices		

**Q - 12. Draw an isometric sketch of a cube of size 5 units.**



Q - 1. Replace the underline words with those given in brackets and frame other sentences.

1. एतत् यंत्रं क्रीणातु। ( फेनकम् , पुस्तकम् )

\_\_\_\_\_

2. सा भोजनं करोति। ( दुग्धपानम् , प्रार्थनाम् )

\_\_\_\_\_

3. व्यर्थश्रम माँ करोतु। ( व्यर्थव्यवहारम् , दुर्व्यवहारम् )

\_\_\_\_\_

4. श्रवानभयं न अनुभवतु। ( चोरभयम् , सिंहभयम् )

\_\_\_\_\_

Q - 2. These stanza translate into Hindi.

चटक चटक , रे चटक !

चिव चिव कुजसी त्वं विहग !

नोडे निवससी सुखेन डयसे

खादसी फलानी मधुराणी ।

\_\_\_\_\_

Q - 3. write the following words in numbers.

1. चतुर्दश \_\_\_\_\_

2. सप्तविंशति \_\_\_\_\_

3. नवदश \_\_\_\_\_

4. अष्टात्रिंशत् \_\_\_\_\_

5. सप्तदश \_\_\_\_\_

Q - 4. write the following numbers in words.

1. २५ \_\_\_\_\_

2. ४६ \_\_\_\_\_

3. ३८ \_\_\_\_\_

4. ४० \_\_\_\_\_

5. १४ \_\_\_\_\_

Q - 5. Draw the pictures of watch in these time.

1. सार्धनववादनम्

2. सपादचतुर्वार्दनम्

3. पादोन एकवादनम्

Q - 6. Write the name of these pictures in Sanskrit and English.

1.



2.



3.



4.



5.



\_\_\_\_\_

Q - 7. Write the some points about the Diwali festival in Sanskrit.

Q - 8. Draw the pictures of any two things and write the name in Sanskrit and English.





**Q - 1. Match the following.**

**A**

1. Liver
2. Large intestine
3. Paramecium
4. Amoeba
5. Canines

**B**

- a) Cilia
- b) pseudopodia
- c) bite juice secretion
- d) tearing teeth
- d) absorption of water

**Q - 2. Write 'T' for true and 'F' for false statements.**

1. Silk is obtained from cocoons of silk worms.
2. The process of washing the fleece of sheep to remove dust, dirt, sweat and grease is called shearing.
3. The rearing of silkworms for obtaining silk is called sericulture.
4. The damaged or waste cocoons are used to produce raw silk.
5. Climate of Thar desert is very hot.

**Q - 3. Very short answer questions.**

1. Name any two heterotrophic plants. \_\_\_\_\_
2. Name the cutting teeth. \_\_\_\_\_
3. Name any two breeds of sheep found in India. \_\_\_\_\_
4. what is meant by temperature ? \_\_\_\_\_
5. Name any two bases. \_\_\_\_\_
6. Give two examples of physical changes. \_\_\_\_\_
7. Name the used to measure rainfall. \_\_\_\_\_
8. Name a device to measure wind speed. \_\_\_\_\_

**Q - 4. Short answer type I question.**

1. what are auto trophs ? \_\_\_\_\_
2. what are chyme ? \_\_\_\_\_
3. what are fibers ? \_\_\_\_\_
4. what is sea breeze ? \_\_\_\_\_

5. complete the following Chemical equation :- a)  $2mg + o_2$  b)  $mgo + H_2o$

6. why do birds migrate ? \_\_\_\_\_

**Q - 5. Short answer type II question.**

1. what is saprotrophic mode of nutrition
2. with the help of flow chart only, describe the life cycle of a silkworm.
3. what is the difference between dilute and concentrated acid ?

**Q - 6. Long answer question.**

1. Draw and Label the diagram of human digestive system.
2. Draw and Label the diagram to shows that sunlight is necessary for photosynthesis.